

Estimating and rounding

Grade 4 Word Problems Worksheets

Use estimation and rounding to choose the appropriate answer for each problem:

1. For lunch at school, each class ordered 21 slices of pizza. If there are 25 classes, the school ordered about _____ slices of pizzas.
a. 500 b. 2,500 c. 250

2. There are 3,727 elementary school students and 9 elementary schools in the area. In each elementary school, there are about _____ students.
a. 500 b. 400 c. 600

3. Each school bus can take 52 students. 89 school buses can take about _____ students.
a. 4,400 b. 4,500 c. 460






4. The school ordered 980 lollipops for the fun fair and used 704 lollipops. There were about _____ lollipops left.
a. 100 b. 200 c. 300

5. 1,348 people attended the school's fun fair. 526 of them are children and about _____ of them are adults.
a. 900 b. 700 c. 800

6. At the fun fair, 1,474 candy floss were made over 3 days. About _____ candy floss were made each day.
a. 500
b. 400
c. 350



Answers

1. 
2. 
3. 
4. 
5. 
6. 