

Name _____

Unit 1 Review

1. Fill in the missing numbers.


a. 23, _____, 25, 26, _____, _____, _____

b. 94, 95, _____, _____, _____, 99, _____

c. _____, 122, 123, _____, _____, _____

2. If you have 3 nickels how much money do you have? _____ ¢

3. Fill in the missing numbers.



4. Write the number 7 in the correct place on the number line.



5. Explain how you knew where to put the number 7 on the number line.

6. Start at 100 and skip count by 5s

100, _____, _____, _____, _____, _____

7. Start at 61 and skip count by 10s

61, _____, _____, _____, _____, _____

8. Write $<$, $>$, or $=$

a. 15 _____ $10 + 5$

b. 10 _____ dime

c. 4 pennies _____ 1 nickel

d. 23 _____ 32


e. 1 quarter _____ 2 dimes

9. Barney is playing Fishing for 10. He has a 4 in his hand. What number should he fish for? _____

10. The 5 on Mike's calculator is broken. Show 3 ways he can make 15 without using the number 5.


11. How many . Tell if it is odd or even.

a.



_____ odd or even

b.



_____ odd or even

12. Fill in the missing numbers.

